


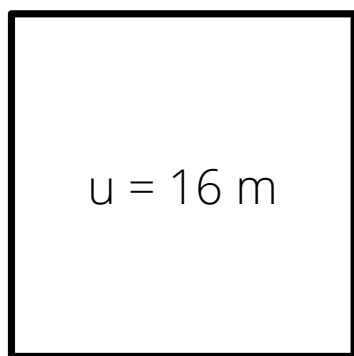


# Lösungsblatt: Umfang Quadrat

1. Wie lang sind die Seiten der Quadrate?

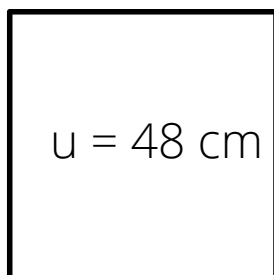


a)



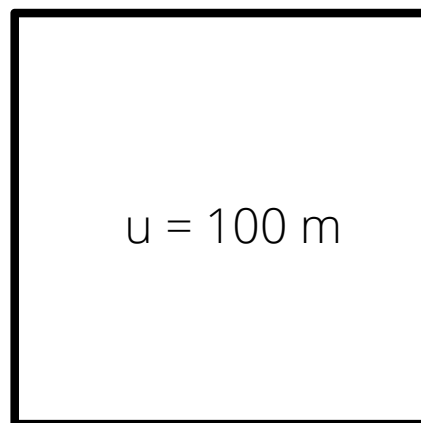
$$a = 4 \text{ m}$$

b)



$$a = 12 \text{ cm}$$

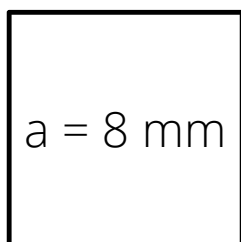
c)



$$a = 25 \text{ m}$$

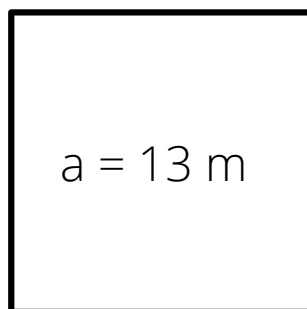
2. Berechne den Umfang!

a)



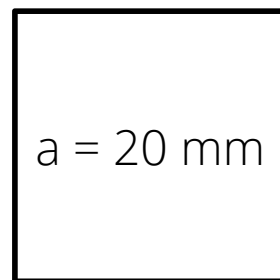
$$u = 32 \text{ mm}$$

b)




$$u = 52 \text{ m}$$

c)



$$u = 80 \text{ mm}$$



3. Ermittle die fehlenden Zahlen!

$a = 9 \text{ cm}$	$a = 19 \text{ m}$	$a = 3 \text{ mm}$	$a = 13 \text{ m}$
$u = 36 \text{ cm}$	$u = 76 \text{ m}$	$u = 12 \text{ mm}$	$u = 52 \text{ m}$

