


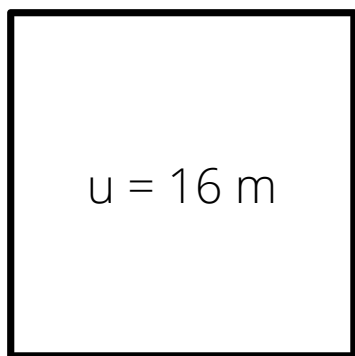


# Arbeitsblatt: Umfang Quadrat

1. Wie lang sind die Seiten der Quadrate?

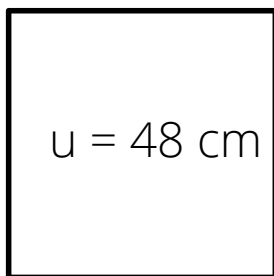


a)



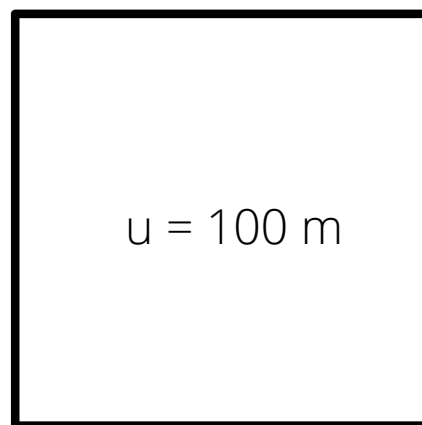
a = \_\_\_\_\_

b)



a = \_\_\_\_\_

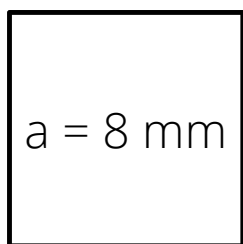
c)



a = \_\_\_\_\_

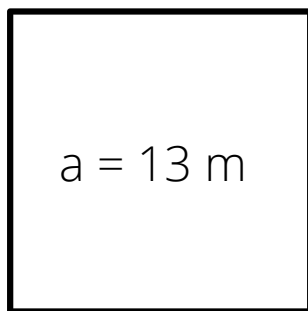
2. Berechne den Umfang!

a)



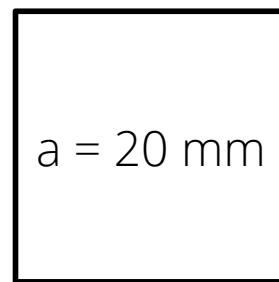
u = \_\_\_\_\_

b)

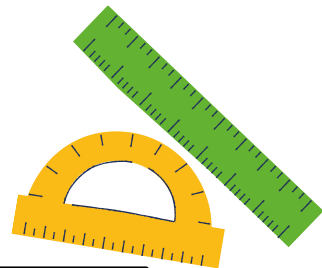


u = \_\_\_\_\_

c)



u = \_\_\_\_\_



3. Ermittle die fehlenden Zahlen!

a = 9 cm	a =	a =	a = 13 m
u =	u = 76 m	u = 12 mm	u =

