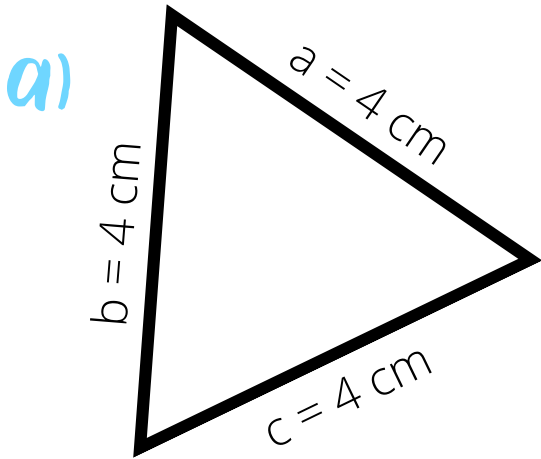


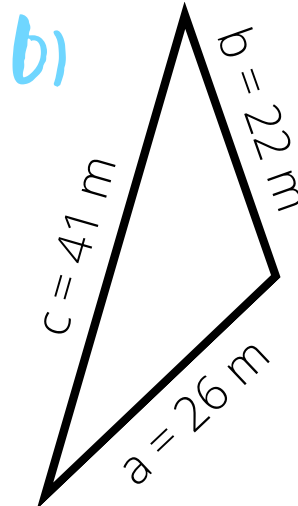


# Arbeitsblatt: Umfang Dreieck

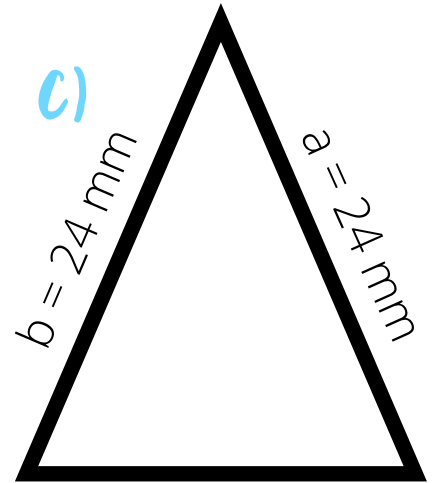
1. Berechne den Umfang der Dreiecke!



u = \_\_\_\_\_



u = \_\_\_\_\_



u = \_\_\_\_\_

2. Ergänze die fehlenden Zahlen!

a)

b)

c)

d)

a = 15 m	a =	a = 36 cm	a = 21 m
b = 12 m	b = 11 mm	b =	b = 16 m
c = 18 m	c = 8 mm	c = 43 cm	c =
u =	u = 36 mm	u = 111 cm	u = 54 m