
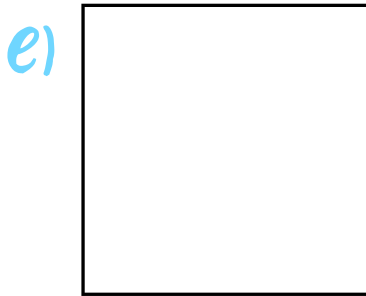
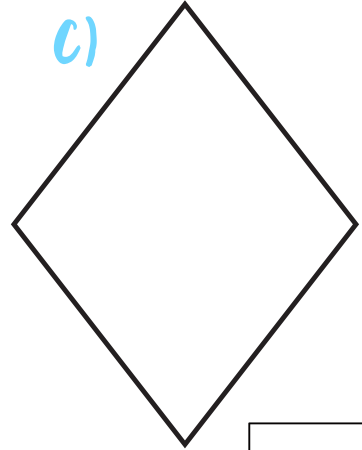
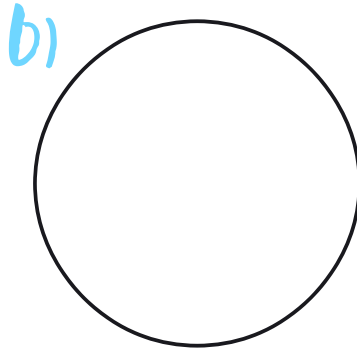


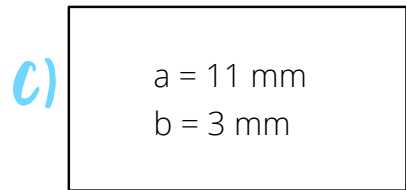
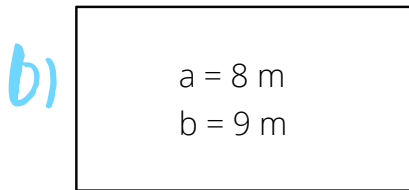
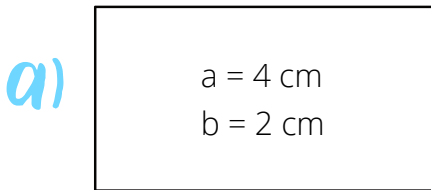


Arbeitsblatt zum Rechteck

1. Welche Figuren sind Rechtecke?
Zeichne ihre Diagonalen ein!



2. Berechne den Umfang und Flächeninhalt der Rechtecke!



3. Fülle die Lücken aus!

a = 13 cm	a =	a = 17 mm	a = 9 dm
b = 5 cm	b = 8 m	b =	b = 7 dm
u =	A = 96 m ²	u = 40 mm	A =